

Section 1

Put the numbers in order, starting with the lowest.

5 7 4


<input type="text"/>	<input type="text"/>	<input type="text"/>
----------------------	----------------------	----------------------



Section 2

Draw 3 more balls.

How many altogether?



Section 3

$5 - 2 =$

$6 - 4 =$

Section 4

Imogen has 7 sweets and eats 4 of them.

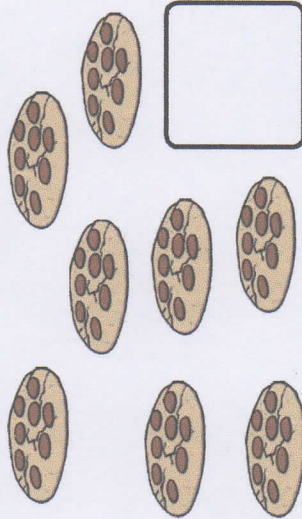
How many sweets are left?



Section 5


Group the cookies in twos.

How many groups are there?



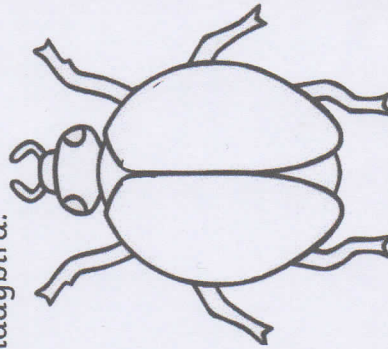
Section 6

Tick the coins which add to 7p.



Section 7

Draw 5 spots onto the ladybird.



Section 8

Fill in the missing number.

4, 5, 6, , 8, 9

