




$$1 + \square = 6$$



I had some cupcakes. I bought 6 more and now I have 9. How many cupcakes did I start with?



$$5 - \square = 4$$



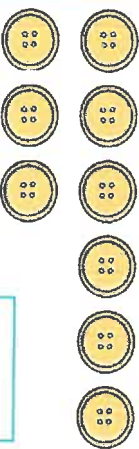
$$9 - \square = 7$$



I had some pennies. I found 4 more and now I have 6. How many pennies did I start with?




$$9 = 3 + \square$$



$$3 + \square = 9$$



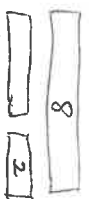
I had some apples. I bought 5 more and now I have 9. How many apples did I start with?



$$9 - \square = 2$$

The football, fish + parrot questions need the missing number in the bottom bar added to the other number on the bottom to make the top number.

E.g.



The answer to this is 6 because $6 + 2 = 8$