


13.1.21

LO: I can partition numbers


Write how many groups of tens and ones there are.

Example




5 tens 1 ones

$$\underline{50} + \underline{1} = \underline{51}$$




_____ tens _____ ones

$$\underline{\quad} + \underline{\quad} = \underline{\quad}$$



_____ tens _____ ones

$$\underline{\quad} + \underline{\quad} = \underline{\quad}$$



_____ tens _____ ones

$$\underline{\quad} + \underline{\quad} = \underline{\quad}$$