

Section 1

Write three numbers less than 40, using the numbers on the cards.

5	8	9	2
<input type="text"/>	<input type="text"/>	<input type="text"/>	<input type="text"/>

Section 2


Use the signs $>$ $<$ to show the most and least amount.

$24 + 52$	<input type="text"/>	$59 + 11$
$£1.45 + £1.36$	<input type="text"/>	$£2.80$
7×5	<input type="text"/>	$40 - 6$

Section 3

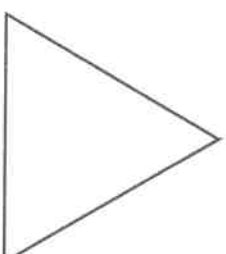
54 is 16 more than which number?

<input type="text"/>



Section 4

Draw three lines of symmetry.

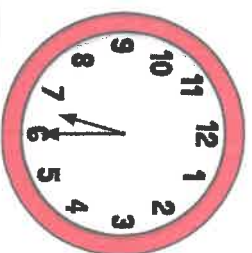


Section 5

Philip invited 35 people to his birthday party. 27 people came. How many people weren't able to come?

Section 6

What time is shown on the clock?



Section 7

Complete the sequence:

50, 47, 44, , ,



Section 8

<input type="text"/>	$+ 19 = 51$	
<input type="text"/>	$- 26 = 25$	
$80 \div$	<input type="text"/>	$= 8$