


Section 1

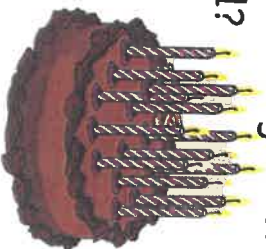
How many apples are there altogether?



Section 2

Sunnah has 13 candles. She needs 21.

How many more does she need?



Section 3

Which shape has five sides?

Section 5

What will the time be $4\frac{1}{2}$ hours?



Section 6

What is double 20?

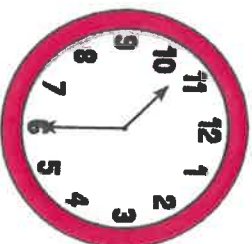
Section 7

Make the highest number you can with these digits.

1 8 4

Section 8

What time is on the clock?



Section 4

How tall is the giraffe?

