



Section 1

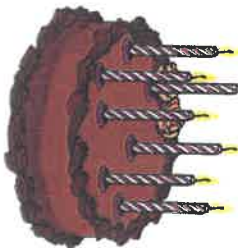
How many apples are there altogether?



Section 2

Toby has 7 candles. He needs 13.

How many more does he need?



Section 3

Which shape has four sides, all the same length?

Section 5

What will the time be in 5 hours?



Section 6

What is double 9?

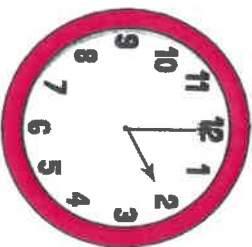
Section 7

Make the highest number you can with these digits.

2 3 6

Section 8

What time is on the clock?



Section 4

How tall is the giraffe?

