


Section 1

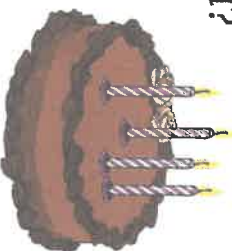
How many apples are there altogether?



Section 2

Maddie has 4 candles. She needs 9.

How many more does she need?

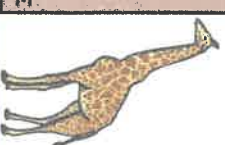



Section 3

Which shape has only one side?

Section 4

How tall is the giraffe?



Section 5

What will the time be in 3 hours?



Section 6

What is double 4?

Section 7

Make the highest number you can with these digits.

2 7

Section 8

What time is on the clock?

