

Section 1

Write three numbers greater than 40, using the numbers on the cards.

3	7	5	2
<input type="text"/>	<input type="text"/>	<input type="text"/>	<input type="text"/>


Section 2

Use the signs $>$ $<$ to show the most and least amount.

39	<input type="text"/>	57
£1.45	<input type="text"/>	£1.36
$24+9$	<input type="text"/>	31

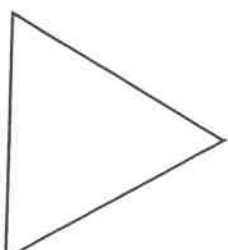
Section 3

18 is seven more than which number?

<input type="text"/>


Section 4

Draw one line of symmetry.



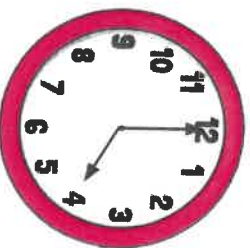
Section 5

Emma invited 14 people to her birthday party. 12 people came. How many people weren't able to come?

<input type="text"/>

Section 6

What time is shown on the clock?



<input type="text"/>

Section 7

Complete the sequence:

52, 54, 56, , ,



Section 8

$$13 + \square = 22$$
$$\square - 9 = 12$$
$$4 \times \square = 8$$