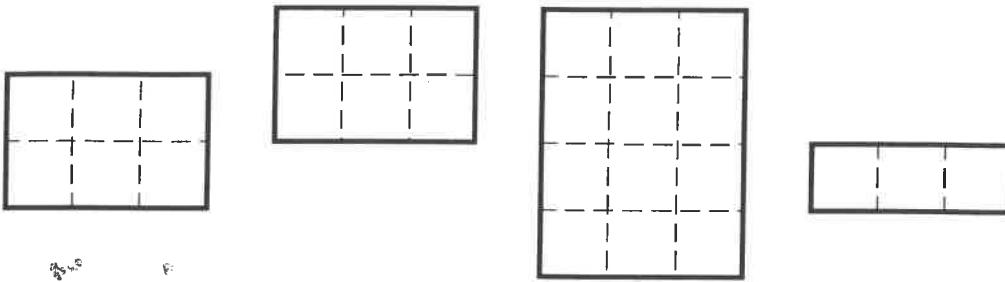


Year 1

Geometry Test 2(M)

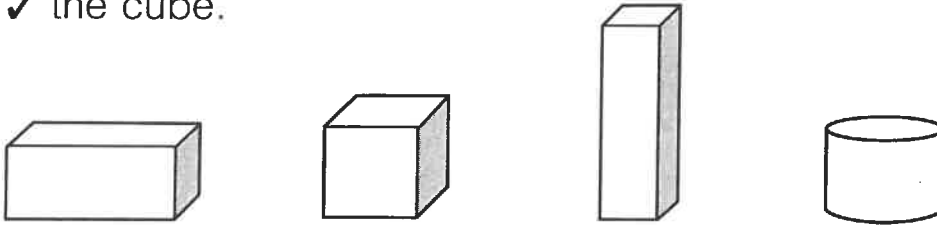
Name: _____ Class: _____ Date: _____

1. Sara fits two of these shapes together to make a square.
 ✓ the two shapes.




1 mark

2. ✓ the cube.




1 mark

3. ✓ the bird that is **fourth**.



1 mark

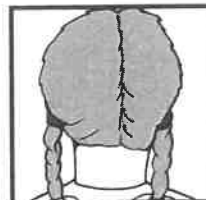
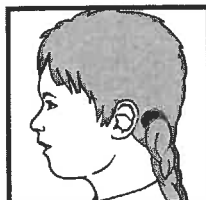

4. ✓ the bird that is seventh from the right-hand end of the branch.



1 mark


Total for
this page

5. Jana starts facing you.
 ✓ the picture that shows her after she makes a quarter turn to her right.



1 mark

6.



Pat

Ben

Ali

Meg

- a) Who is standing on Ben's right-hand side?
- b) Who is standing between Ben and Meg?
- c) Who is standing furthest from Pat?

1 mark

1 mark

1 mark

Total for
this page