


Year 1 Measurement Test 2(M)

Name: _____ Class: _____ Date: _____

1. Write the names in order from shortest to tallest.



Pat

Ben

Ali

Meg


shortest

Pat

tallest

1 mark

2. How many buttons long is the crayon?





1 mark

3. Match each label to a jug of water.

most water

least water



1 mark

Total for this page

4. How much money is here?


 p

1 mark

5. straw



crayon



pencil



watch



stick






a) What is longer than the straw?

1 mark

b) What is as long as the crayon?

1 mark

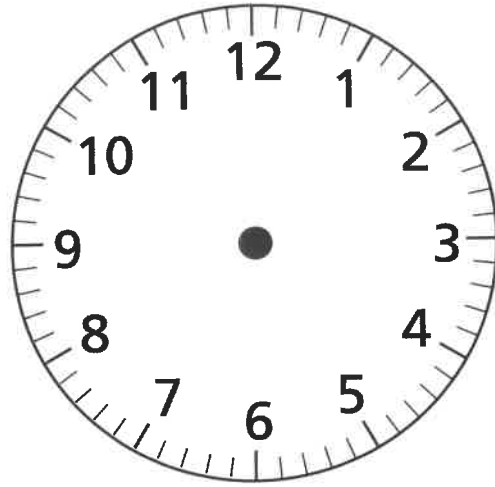
6. ✓ the clock that shows half past two.



1 mark






Total for this page

7. Draw hands on this clock to show the time is seven o'clock.



1 mark

8. Our weather chart

Monday	
Tuesday	
Wednesday	
Thursday	
Friday	

a) On which day is it  ?

1 mark

b) How many days are  ?

1 mark

/10
Total for this test