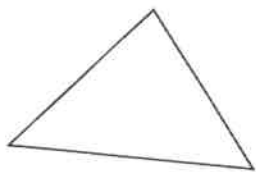


# Year 2 Geometry Test 2(M)

Name: \_\_\_\_\_ Class: \_\_\_\_\_ Date: \_\_\_\_\_

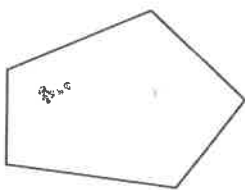
1. How many sides has each shape?



has



sides



has

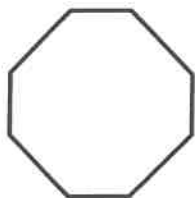


sides



1 mark

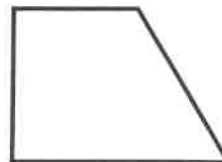
2. On the diagram, write the letter of each shape in the correct place.



A



B



C

	Has line symmetry	Has no line symmetry
Is a quadrilateral		
Is not a quadrilateral		

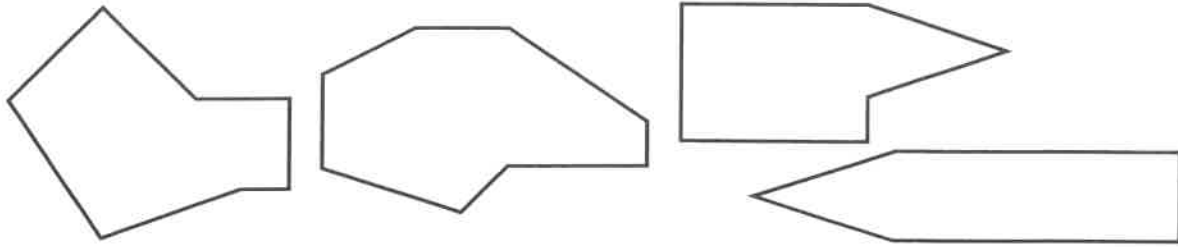


2 marks



Total for this page

3. ✓ the shape that is an octagon.



1 mark

4. Complete the table.

3-D shape	Faces	Vertices	Edges
Cuboid			12
Triangular-based pyramid		4	

2 marks

5. ✓ the 3-D shape that has a circle for **one** of its faces.

PYRAMID


CONE

CYLINDER

CUBOID

1 mark

6. Draw the next three shapes in the pattern.



1 mark

Total for  
this page