

Year 2 Measurement Test 2(M)

Name: _____ Class: _____ Date: _____

1. What is the most likely length of a classroom? Circle the length.

1 metre 10 metres 100 metres 1 kilometre

1 mark

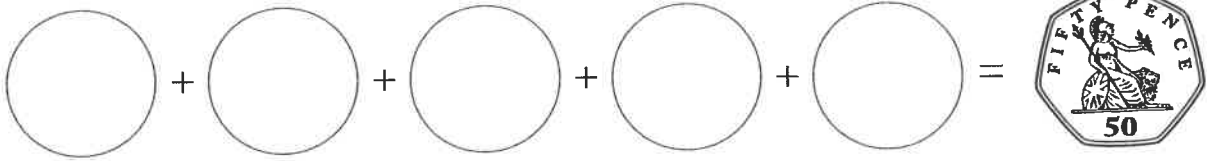
2. Draw a line that is 2 cm shorter than this line.



1 mark

3. Paulina has five coins. They are all the same. They add up to 50p.

What five coins does she have?



1 mark

4. ✓ the **four** coins that add up to 13p.



1 mark

Total for this page

5. Dan has £30.
He wants a bike that costs £75.
How much more money does he need?

£



1 mark

6. Casmir has £10.



- Casmir spends £4.
How much does he have left?

£

1 mark

7. Tickets cost £24 each.
Fergus buys four tickets.
How much change does Fergus get from £100?
Show your working.

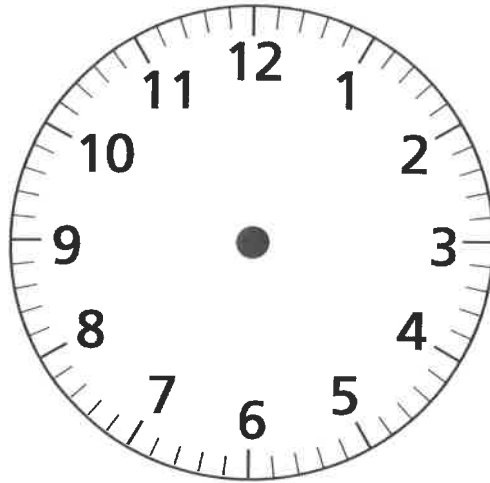


£

2 marks


Total for this page

8. Jane wakes up at 7 o'clock.
 She leaves for school one hour later.
 Show on this clock the time she leaves for school.



1 mark

9. What is the time on the clock?


 :

1 mark

/10
Total for this test