


Section 1
What is half
of 24?

12

Section 2
How many fish are there altogether?

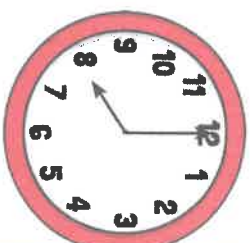


21

Section 3
What day is three
days before Monday?


Friday

Section 4
What
was the
time 3
hours
ago?



5 o'clock

Section 5
How much of
the square is
shaded?



$\frac{1}{4}$

Section 6

$15 + 9 =$

24

$23 - 7 =$

16

$5 \times 8 =$

40

Section 7

Tick the coins that add up
to 22p.



Section 8

Share the ducks equally between 2
ponds. How many ducks are in 1 pond?



8