


Section 1

What is half of 20?

Section 2

How many fish are there altogether?

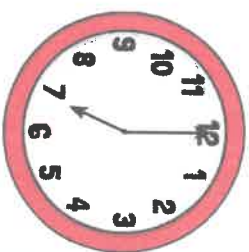


Section 3

What day is two days after Tuesday?


Section 4

What time will it be in 1 hour?



Section 5

How much of the square is shaded?



Section 6

$12 + 4 = \square$

$11 - 7 = \square$

$4 \times 10 = \square$

Section 7

Tick the coins that add up to 18p.



Section 8

Share the ducks equally between 2 ponds. How many ducks are in 1 pond?

