



Section 1

What is half of 8?



Section 2

How many fish are there altogether?



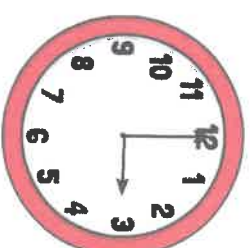
Section 3

What day is next?
Tuesday, Wednesday,
Thursday...




Section 4

What time is on the clock?



Section 5

Colour $\frac{1}{2}$ of the square.



Section 6


$$3 + 6 = \square$$



$$10 - 4 = \square$$




$$3 \times 2 = \square$$



Section 7

Tick the coins that add up to 12p.



Section 8

Share the ducks equally between 2 ponds. How many ducks are in 1 pond?

