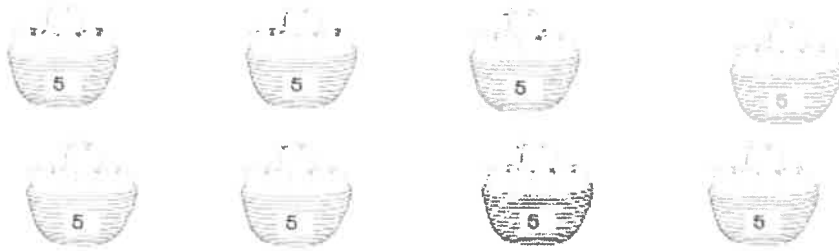


Purple penguins

Monday 1st November 2021

This week's homework is numeracy and is looking at counting in 2's, 5's and 10's. Can you have a go at the worksheet by counting the amount of items in each basket. Remember to look at the number you are counting in.

How many oranges are there altogether? _____



How many potatoes are there altogether? _____



How many apples does the shop have altogether? _____



Challenge:

How many items are in the shop altogether? _____

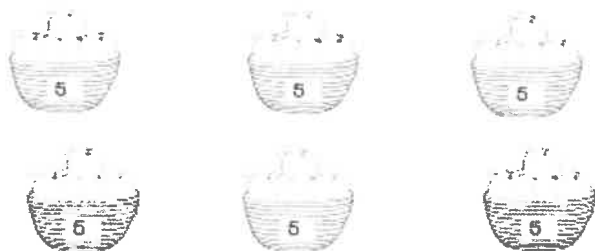


Turquoise Turtles

Monday 1st November 2021

This week's homework is Numeracy and is looking at counting in 2's, 5's and 10's. Can you have a go at the worksheet by counting the amount of items in each basket. Remember to look at the number you are counting in.

How many oranges are there altogether? _____



How many potatoes are there altogether? _____



How many apples does the shop have altogether? _____

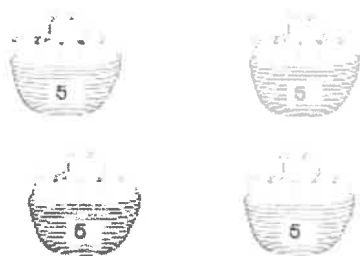


Magenta Monkeys


Monday 1st November 2021

This week's homework is Numeracy and is looking at counting in 2's, 5's and 10's. Can you have a go at the worksheet by counting the amount of items in each basket. Remember to look at the number you are counting in.

How many oranges are there altogether? _____



How many potatoes are there altogether? _____



How many apples does the shop have altogether? _____




Red Robins.

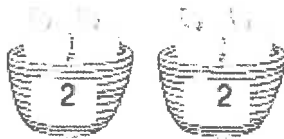
Monday 1st November 2021

This week's homework is Numeracy and is looking at counting in 2's, 5's and 10's. Can you have a go at the worksheet by counting the amount of items in each basket. Remember to look at the number you are counting in.

How many potatoes are there altogether? _____



How many apples does the shop have altogether? _____



How many oranges are there altogether? _____

