


Red Robins

Monday 24th January 2022

This week's homework is numeracy and is looking at solving problems. Can you have a go at solving the problem and writing down your calculations. Use the hundred square to help you.

Addition and Subtraction to 100 Word Problems

21. If you see 34 fish in a fish tank and 7 more are put in, how many fish are there altogether?




1	2	3	4	5	6	7	8	9	10
11	12	13	14	15	16	17	18	19	20
21	22	23	24	25	26	27	28	29	30
31	32	33	34	35	36	37	38	39	40
41	42	43	44	45	46	47	48	49	50
51	52	53	54	55	56	57	58	59	60
61	62	63	64	65	66	67	68	69	70
71	72	73	74	75	76	77	78	79	80
81	82	83	84	85	86	87	88	89	90
91	92	93	94	95	96	97	98	99	100

Monday 24th January 2022

This week's homework is numeracy and is looking at solving problems. Can you have a go at solving the problem and writing down your calculations. Use the hundred square to help you.

Addition and Subtraction to 100 Word Problems

16. If you spot 36 butterflies in your garden and 11 more join them, how many butterflies would there be altogether?











1	2	3	4	5	6	7	8	9	10
11	12	13	14	15	16	17	18	19	20
21	22	23	24	25	26	27	28	29	30
31	32	33	34	35	36	37	38	39	40
41	42	43	44	45	46	47	48	49	50
51	52	53	54	55	56	57	58	59	60
61	62	63	64	65	66	67	68	69	70
71	72	73	74	75	76	77	78	79	80
81	82	83	84	85	86	87	88	89	90
91	92	93	94	95	96	97	98	99	100

Monday 24th January 2022

This week's homework is numeracy and is looking at solving problems. Can you have a go at solving the problem and writing down your calculations.

Buying Ice Creams

Haleema and Erin have 60p to spend on ice cream toppings.

<p>Strawberries</p>  <p>39p</p>	<p>Bananas</p>  <p>26p</p>	<p>Marshmallows</p>  <p>27p</p>	<p>Sprinkles</p>  <p>38p</p>
<p>Flake</p>  <p>28p</p>	<p>Chocolate Chunks</p>  <p>47p</p>	<p>Fudge Chunks</p>  <p>29p</p>	<p>Blueberries</p>  <p>35p</p>

They buy 2 toppings. How much could they have spent and how much change would they have from 60p?

Purple Penguins

Monday 24th January 2022









This week's homework is numeracy and is looking at solving problems. Can you have a go at solving the problem and writing down your calculations.

Buying Ice Creams

Haleema and Erin have 40p to spend on ice cream toppings.

They buy 2 toppings. Choose 2 toppings that they could buy.

How much change would they have from 40p?

Strawberries  10p	Bananas  12p	<p>I chose fudge chunks and sprinkles. $18p + 16p = 34p$ $40p - 34p = 6p$ I would get 6p change from 40p.</p> 	
Marshmallows  8p	Sprinkles  16p		
Flake  15p	Chocolate Chunks  14p		Fudge Chunks  18p