

Red Robins

Monday 4th April 2022

This week's homework is numeracy and we have been doing lots of work on time in class. Can you have a go at looking at the clocks and writing down the correct time underneath.


Write the time shown on each clock.




___ o'clock



___ o'clock




___ o'clock



___ o'clock




___ o'clock




___ o'clock




___ o'clock



___ o'clock




___ o'clock



___ o'clock



___ o'clock




___ o'clock


magenta monkeys

Monday 4th April 2022

This week's homework is numeracy and we have been doing lots of work on time in class. Can you have a go at looking at the clocks and writing down the correct time underneath.

Write the time shown on each clock.











































Turquoise Turtles

Monday 4th April 2022

This week's homework is numeracy and we have been doing lots of work on time in class. Can you have a go at looking at the clocks and writing down the correct time. It will either be o'clock, quarter past, half past or quarter to.

 _____	 _____	 _____
 _____	 _____	 _____
 _____	 _____	 _____
 _____	 _____	 _____

Purple Penguins

Monday 4th April 2022

This week's homework is numeracy and we have been doing lots of work on time in class. Can you have a go at looking at the clocks and writing down the correct time underneath. Remember to count in 5s when you are counting round the clock.



E.g. 10 minutes past 2.

